



CHESS PIECES



ROOK

[R]

5 pts



KNIGHT

[N]

3 pts



KING

[K]

∞



QUEEN

[Q]

9 pts



BISHOP

[B]

3 pts




PAWN

[P]

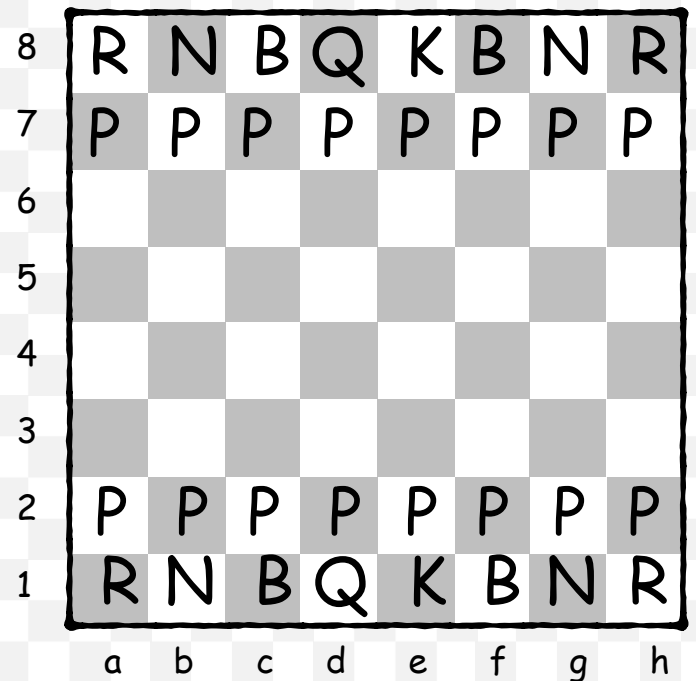
1 pt



Starting Position (with symbols)



Starting Position (with notation)



Remember! Queen always starts on her color. Also, white pieces start on the a1 side.



CHESS PIECES & MORE

ROOK

[R]

5 pts



KNIGHT

[N]

3 pts



KING

[K]

∞



QUEEN

[Q]

9 pts



BISHOP

[B]

3 pts




PAWN

[P]

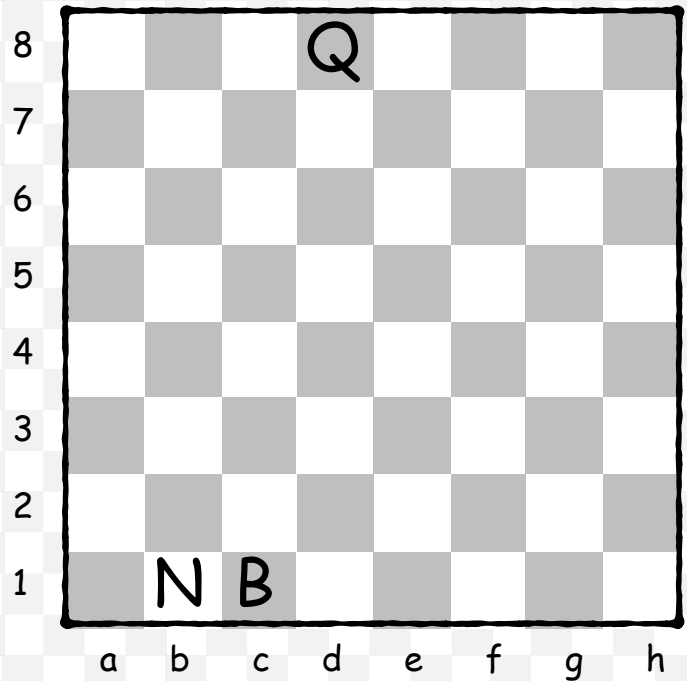
1 pt



FIND + CIRCLE the pieces that are in the wrong Starting Position!



Using NOTATION, write in the Starting Position! (Here's a few hints!)



Name the black piece on the square:

b7=

c6=

d5=

e6=

e7=

g7=

g8=

h7=

8

7

6


5

4

3

2

1



Name the white piece on the square:

a1=

a3=

b2=

b4=

c3=

c4=

d1=

g1=