




Name: _____
Location: _____
Instructor: _____

Final Test: Course One


1. A Chessboard has _____ squares.
 - a. 44
 - b. 32
 - c. 64

2. The Chessboard should be set up so that each player has a _____ square in their right corner.
 - a. black
 - b. white

3. Write in the **name** and **point value** of each piece.

 _____

 _____

 _____

 _____

 _____

 _____

4. How does a Move differ from a Capture?

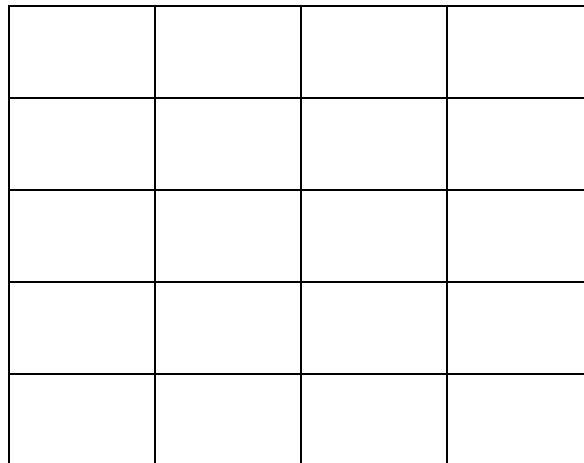
5. True or False: The Rooks start on the 1st Rank. _____

6. The Pawn captures in which direction? _____

7. True or False: The Rook can move diagonally? _____

8. True or False: The Pawns do not capture the same way it normally moves. _____

9. Use the grid below to draw the shape a Knight moves in?



10. Which piece is the MOST IMPORTANT piece in the game. _____

11. Which color does the Queen start on? _____

12. Only one piece can jump over other pieces, and it is the _____.

13. Name one way of being Gracious?

14. You must say "Check" when you threaten your opponent's _____ .

15. True or False: It is impossible to get out of "Checkmate". _____

16. Name the three ways you can get out of "Check"?

1. _____

2. _____

3. _____

17. Which is the most preferred way to get out of "Check"? _____

18. What piece has a special move called "en Passant"? _____

19. True or False: The King can Castle as many times as it wants. _____

20. True or False: The King can Castle to get out of Check. _____

21. True or False: The King is allowed to Castle with other pieces in the way. _____